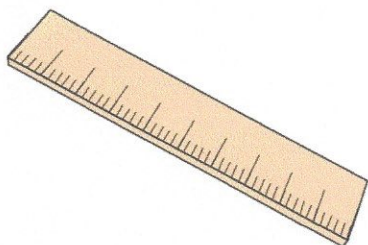



Primary Practice Questions



Corbettmaths



Ordering Numbers



Tips

- Read each question carefully
- Attempt every question.
- Check your answers seem right.
- Always show your workings

Recap

Remember

- There are daily questions found at
www.corbettmaths.com/5-a-day/primary

1. Write these numbers in order, starting with the **smallest**

172 217 273 198

172	198	217	273
-----	-----	-----	-----

smallest

largest

-
2. Write these numbers in order, starting with the **smallest**


502 1052 520 205 250

205	250	502	520	1052
-----	-----	-----	-----	------

smallest

largest

3. Here are the heights of five hills.

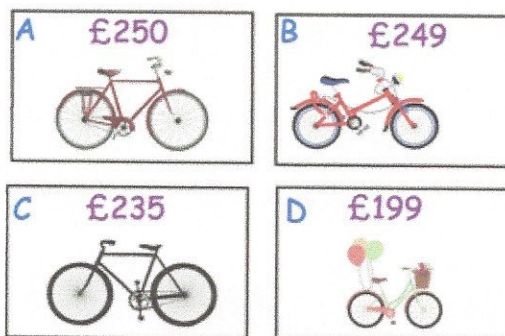


Altmore	538m	3
Heathmount	551m	5
Slemish	499m	1
Donard	542m	4
Cley Hill	517m	2

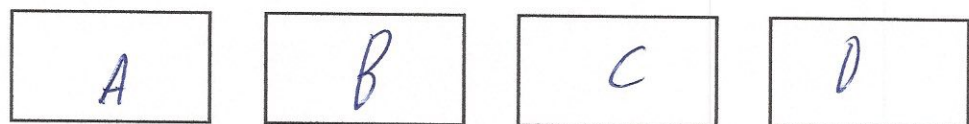
List the hills in order of size, starting with the smallest.

Slemish, Cley Hill, Altmore, Donard, Heathmount

- 4.



Put these bicycles in order of price, starting with the **highest** price



highest

lowest

5. Write these prices in order, starting with the smallest

£6.30

£3.60

63p

£0.36

£3.06

£0.36

63p

£3.06


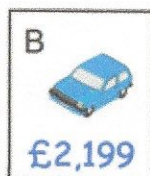
£3.60

£6.30

smallest

largest

- 6.



Put these cars in order of price, starting with the lowest price

B

D

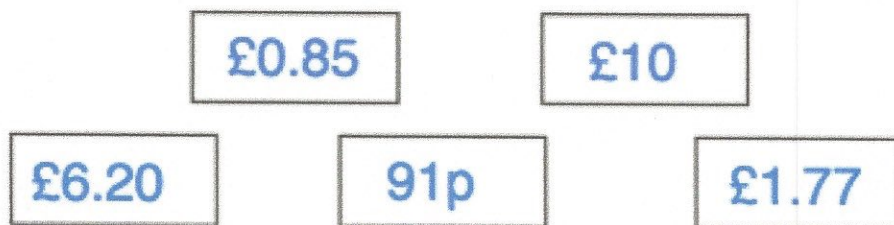
A

C


lowest

highest

7.




Write these amounts in order, starting with the smallest



8.

Arrange these temperatures in order, from lowest to highest

0°C -20°C 6°C 17°C -13°C



9. Here are the temperatures in a town over 4 days.

Monday	Tuesday	Wednesday	Thursday
-3°C	-1°C	-6°C	0°C

On what day was the lowest temperature recorded?

Wednesday

Arrange the temperatures in order, starting with the highest

0°C

-1°C

-3°

-6°C

highest

lowest

10. Write these numbers in order, starting with the **smallest**

15,123

15,200

15,032

15,103

15,013

15,013

15,032

15,103

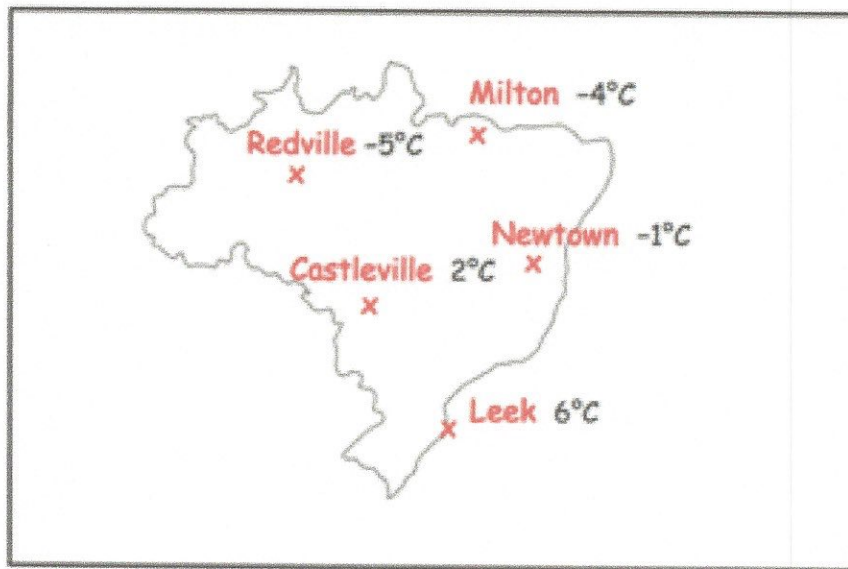
15,123

15,200

smallest

largest

11. Here are the temperatures in five towns




Arrange the towns in order of temperature, starting with the lowest

Redville, Milton, Newtown, Castleville, Leek

Which town has a temperature closest to 0°C ?

Newtown

12. Here are the populations in five countries in 2018.



Which country has the smallest population?

Spain

Arrange the countries in order of population, starting with the smallest.

Spain, Italy, France, Thailand, Turkey

13. Write the correct sign $>$ or $<$ in each box

$$58 \quad \boxed{>} \quad 49$$

$$109 \quad \boxed{<} \quad 120$$

$$776 \quad \boxed{<} \quad 780$$

$$8,039 \quad \boxed{>} \quad 8,027$$

14. Here are five numbers

one billion 1,000,000,000

half a million 500,000

six thousand and ninety-nine 6,099

twenty-three thousand 23,000

two million 2,000,000

Arrange these numbers in order of size, starting with the smallest

smallest..... Six thousand and ninety-nine
.....
..... twenty - three thousand
.....
..... half a million
.....
..... two million
.....
largest..... one billion